

WORK-SHEET

CLASS:- IV

Subject:- MATHS

NAME:-.....

ROLL NO.:-.....

Q.1. Different kinds of bird beaks are given below. How do they help the bird?

.....



.....



.....



.....



.....



.....




Q.2. How many kinds of teeth an adult people have? Draw the pictures of human teeth and write their name?

Ans.

.....
.....


Draw the pictures here:-




.....



.....



.....



.....